



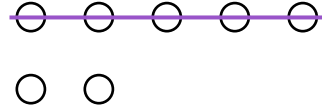
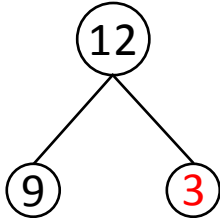
NAME \_\_\_\_\_

DATE \_\_\_\_\_

## SUBTRACTIONS

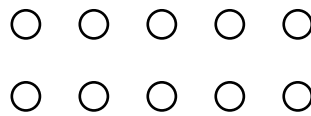
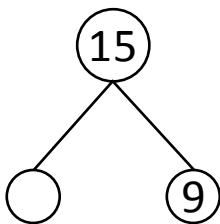
Use 5 groups to complete the number bond. Write the 9- number sentence.

Example:

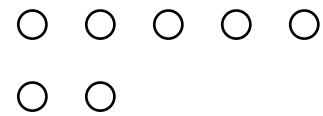
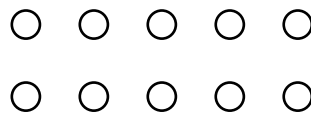
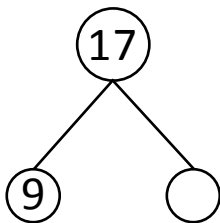


$$12 - 9 = 3$$


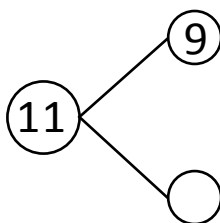
1)



2)



3)



4)

